

# 5 times table

Name: \_\_\_\_\_

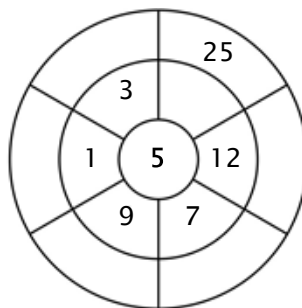
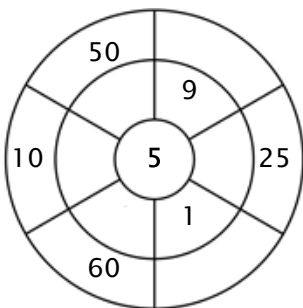
## Exercise 1:

Color in all of the boxes that are the solutions of this time table.

4	17	35	1	5
50	6	5	20	55
37	50	54	33	25
42	30	62	45	45
5	60	22	60	15

## Exercise 2:

Complete the circle by multiplying the number in the center by the middle ring to get the outer numbers.



## Exercise 3:

Fill in the correct product.

a)  $7 \times 5 = \underline{\quad}$

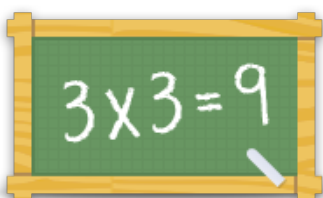
b)  $5 \times 5 = \underline{\quad}$

c)  $9 \times 5 = \underline{\quad}$

d)  $4 \times 5 = \underline{\quad}$

e)  $12 \times 5 = \underline{\quad}$

f)  $10 \times 5 = \underline{\quad}$



For more worksheets, games and exercises:  
[www.timestables.co.uk](http://www.timestables.co.uk)