

# 2 times table

Name: \_\_\_\_\_




## Exercise 1:

Draw a line connecting the multiplication expression with the correct product.

$7 \times 2$	20	
$4 \times 2$		10
$3 \times 2$	4	
$2 \times 2$		6
$12 \times 2$	22	
$10 \times 2$		24
$11 \times 2$	12	
$1 \times 2$		2
$6 \times 2$	14	
$5 \times 2$		8

## Exercise 2:

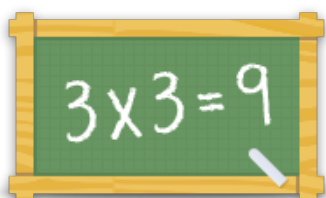
Fill in the missing number.

- a)   $\times 2 = 14$     b)   $\times 2 = 18$     c)   $\times 2 = 12$

## Exercise 3:

Fill in the correct product.

- a)  $5 \times 2 = \underline{\quad}$     b)  $4 \times 2 = \underline{\quad}$     c)  $8 \times 2 = \underline{\quad}$   
d)  $12 \times 2 = \underline{\quad}$     e)  $7 \times 2 = \underline{\quad}$     f)  $1 \times 2 = \underline{\quad}$



For more worksheets, games and exercises:  
[www.timestables.co.uk](http://www.timestables.co.uk)