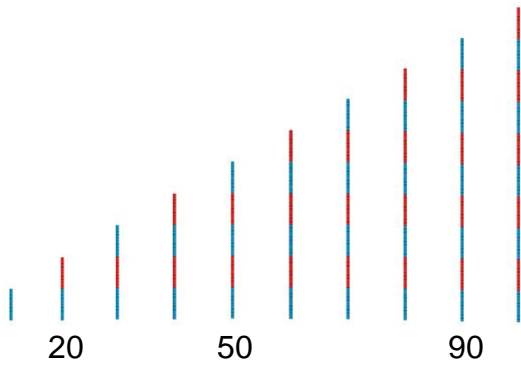


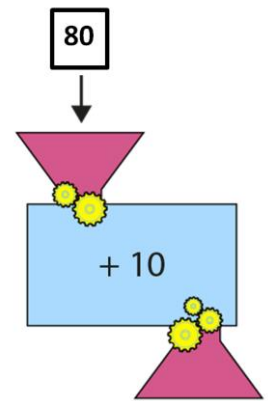
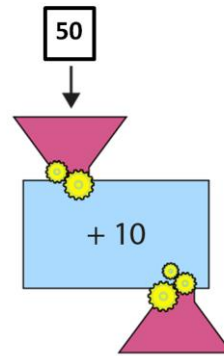

L.I. To find 10 more and 10 less

Find the missing numbers:

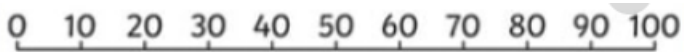


10 less \uparrow		10 more \downarrow
	20	
	40	
	30	
	50	
	70	
	90	
	80	

Find 10 more and 10 less:

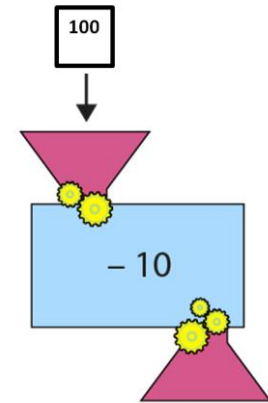
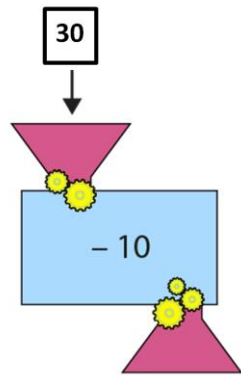


Use the number line to help you find 10 more:



ten more than:

- 20
- 50
- 70
- 100



Use the number line to help you find 10 less:



ten less than:

- 10
- 30
- 70
- 100

Challenge:

