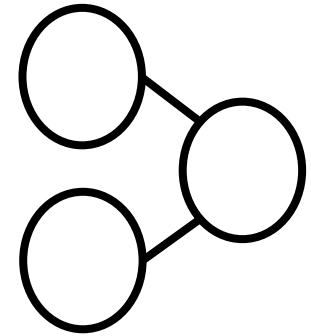
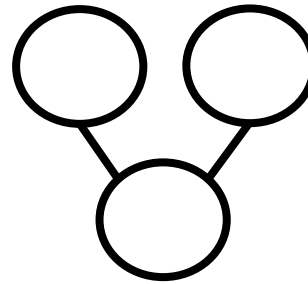
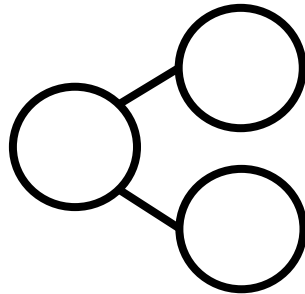

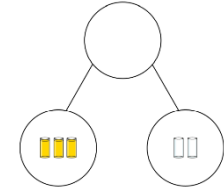
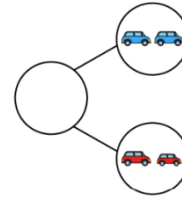
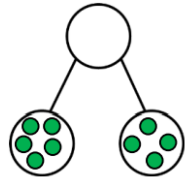
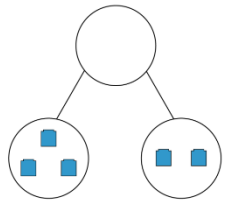


Maths homework - Monday 23-11-20 Complete the cherry model by adding the numbers to match the pictures.



Maths homework - Tuesday 24-11-20 - Practise counting forwards and backwards - Can you say what is one more or one less than a given number?



Put a circle around the number 8. Write down two numbers that are greater (more) than 8.

Write down two numbers that are less than 8.

Maths homework - Wednesday 25-11-20 - Read the information to your child and discuss it. Can they explain the answer? Please encourage your child to use full sentences when explaining their thinking.

Jack has 6 flowers.

Rosie has more flowers than Jack.

Amir has more flowers than Rosie.



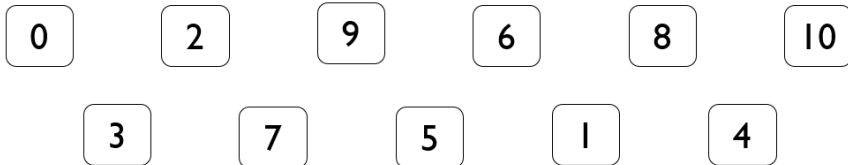
Who has the least amount of flowers?



Maths homework - Thursday 26-11-20 - Record some of your answers below. See if you can say the sentences aloud.

Using number cards 0 – 10, how many ways can you make the statement correct?

_____ is more than _____



_____ is more than _____

_____ is more than _____

_____ is more than _____

_____ is more than _____

_____ is more than _____

_____ is more than _____

_____ is more than _____

_____ is more than _____

_____ is more than _____

_____ is more than _____

